



GCSE MATHEMATICS

S21-C300

With Calculator Assessment Resource K

Higher Tier

Formula list

Area and volume formulae

Where r is the radius of the sphere or cone, l is the slant height of a cone and h is the perpendicular height of a cone:

$$\text{Curved surface area of a cone} = \pi r l$$

$$\text{Surface area of a sphere} = 4\pi r^2$$

$$\text{Volume of a sphere} = \frac{4}{3}\pi r^3$$

$$\text{Volume of a cone} = \frac{1}{3}\pi r^2 h$$

Kinematics formulae

Where a is constant acceleration, u is initial velocity, v is final velocity, s is displacement from the position when $t = 0$ and t is time taken:

$$v = u + at$$

$$s = ut + \frac{1}{2}at^2$$

$$v^2 = u^2 + 2as$$

1.

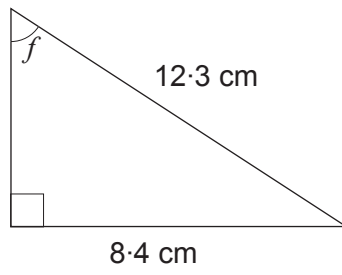


Diagram not drawn to scale

Calculate the size of angle f .

[3]

.....

.....

.....

.....

3. In scientific reports, temperatures are often given using more than one temperature scale.

Celsius, Fahrenheit and kelvin are all measured on linear scales.

Use the information given below to complete the tables.

(a)

Degrees Celsius	Degrees Fahrenheit
30
40	104
50	122
60

[1]

.....
.....

(b)

Kelvin	Degrees Celsius
0
100
200
300	26.85
400	126.85

[2]

.....
.....

(c)

Kelvin	Degrees Celsius	Degrees Fahrenheit
320

[5]

.....
.....
.....
.....

4. Ben draws an irregular pentagon.
The interior angles of the pentagon he has drawn are all less than 180° .

Ben attempts to express the interior angles of his pentagon using algebra.
His expressions are

$$x^\circ, (x + 40)^\circ, (2x - 30)^\circ, 3(x - 40)^\circ \text{ and } 3x^\circ.$$

Show that Ben is incorrect.

[6]

.....

.....

.....

.....

.....

.....

.....

.....

.....

.....

.....

.....

.....

.....

.....

.....

.....

.....

.....

.....

.....

.....

.....

Ben is incorrect because

5. The diagram below shows a plan view of a stage, $ABCD$. ABC is a sector of a circle, with centre C .

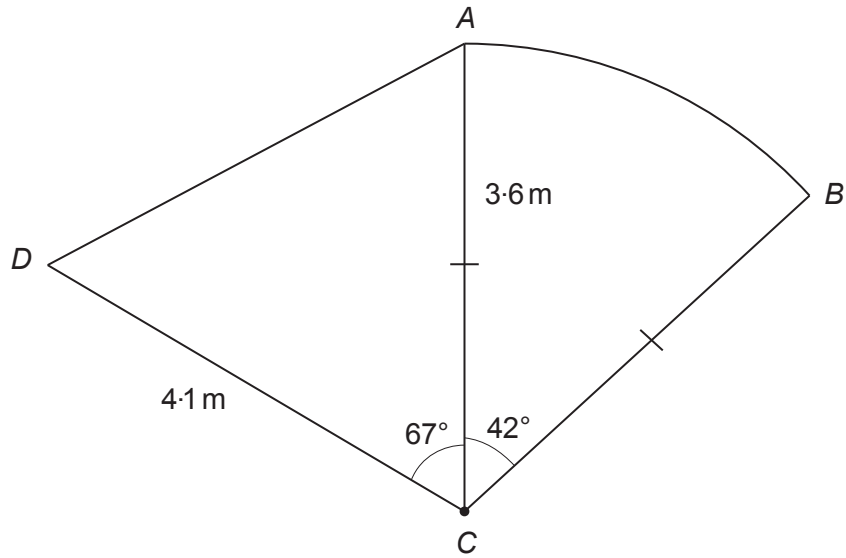


Diagram not drawn to scale

- (a) The band *Fredalive* need a stage area of at least 11.5 m^2 to set up equipment and perform.

Is this stage suitable for *Fredalive* to set up equipment and perform?
 You must show all your working.

[5]

.....

.....

.....

.....

.....

.....

.....

.....

.....

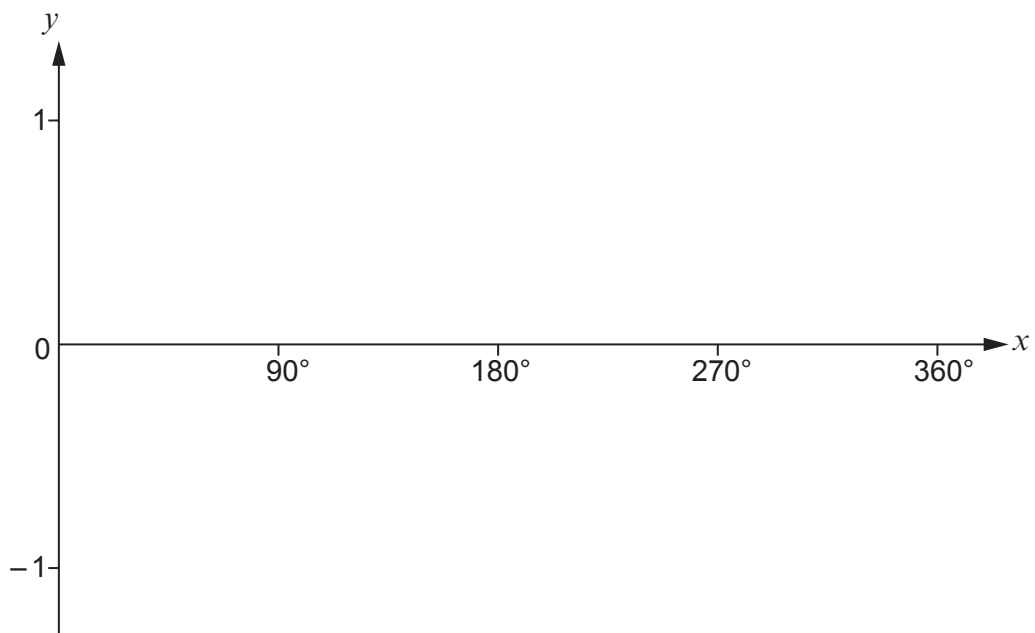
.....

.....

Conclusion
 The stage is suitable:

Yes No

6. (a) Using the axes below, sketch a graph of $y = \sin x$ for values of x from 0° to 360° . [1]



- (b) Find all the solutions of the following equation in the range 0° to 360° . [2]

$$5 \sin x = 2$$

.....

.....

.....

.....

.....

.....

.....